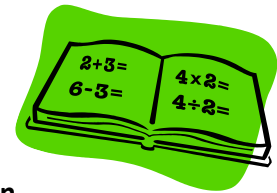


Year 5 Maths Homework- Newtown and Soberton

Date set: 10/01/2018

Due back: 15/01/2018



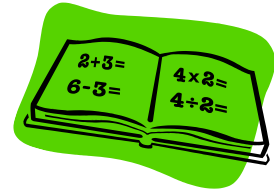
1. Correct any mathematical misunderstandings (using your fraction knowledge) from this section of 'There's a boy in the girls' bathroom.' Annotate on the page.
2. Explain in words how to would help Bradley to answer this question.

Year 6 Maths Homework

Date set: 10/01/2018

Due back: 15/01/2018

In your rising stars books, please complete p 21 and p23.

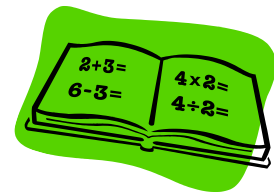


Year 6 Maths Homework

Date set: 10/01/2018

Due back: 15/01/2018

In your rising stars books, please complete p 21 and p23.



Year 6 Maths Homework

Date set: 10/01/2018

Due back: 15/01/2018

In your rising stars books, please complete p 21 and p23.

